









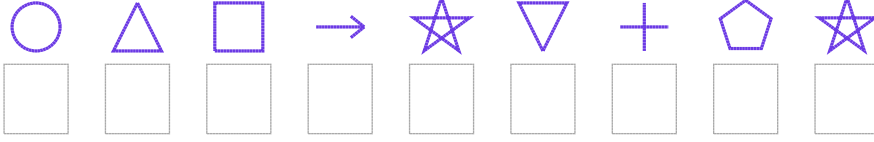


# Şekil Sayı Eşleştirme

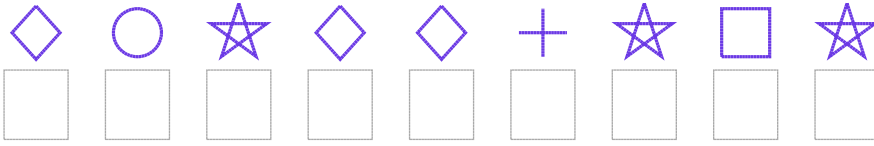
 = 7	 = 9	 = 2	 = 8	 = 6	 = 4	 = 3	 = 5	 = 1	 = 0
--	--	--	--	--	--	---	--	--	--

Aşağıdaki uzun şifreleri hatasız çözerek altlarına yazın:

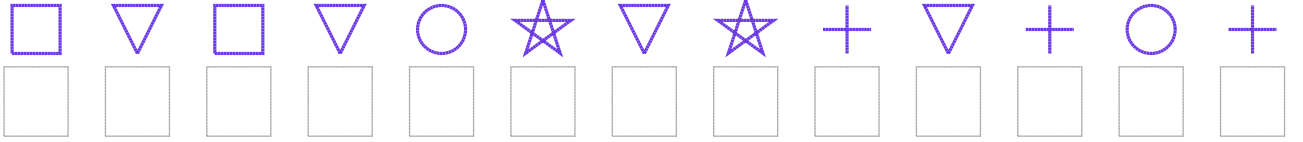
1. Şifre



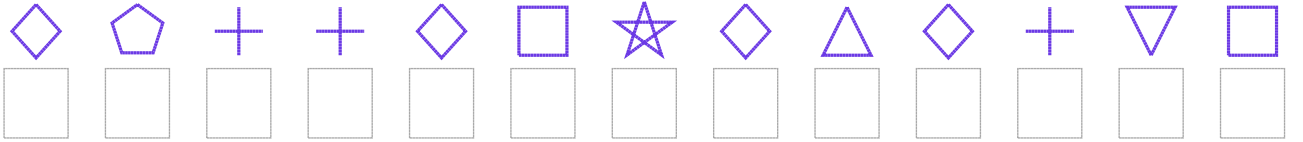
2. Şifre



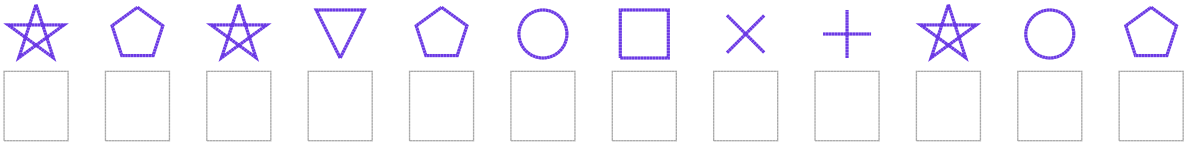
3. Şifre



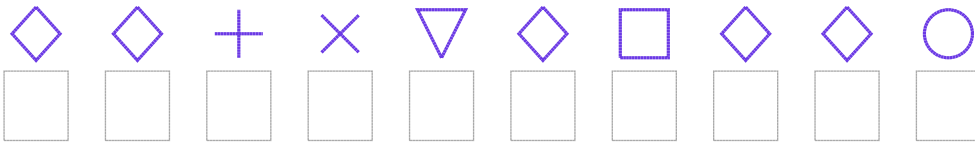
4. Şifre



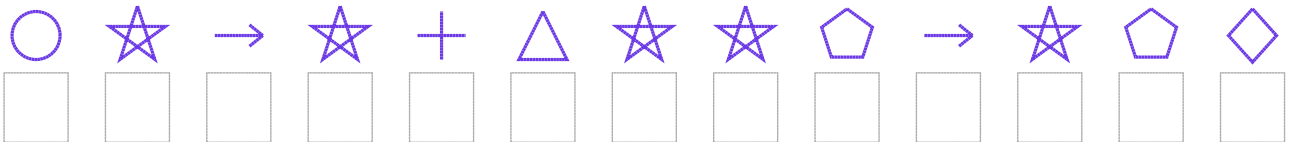
5. Şifre



6. Şifre



7. Şifre



□ BONUS: 3. ve 4. şifrenin ikinci rakamının toplamı kaçtır? .....

## Cevap Anahtarı

1. Şifre: 405971627
2. Şifre: 347336757
3. Şifre: 5151471761646
4. Şifre: 3266357303615
5. Şifre: 727124586742
6. Şifre: 3368135334
7. Şifre: 4797607729723

□ Bonus Soru Cevabı: 3